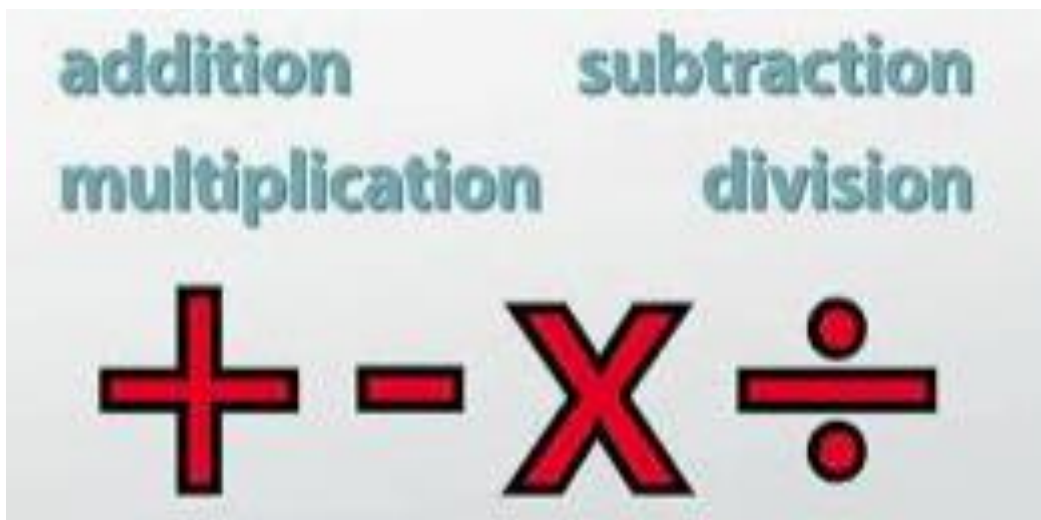


Four Operations Practice

Welcome to the KS2 Four Operations Practice booklet!

This resource is designed to help you strengthen your skills in addition, subtraction, multiplication, and division. Get ready to engage with a variety of exercises and challenges to sharpen your mathematical abilities.



Addition Practice:


Addition:

1. $23 + 15 = \underline{\quad}$

2. $47 + 89 = \underline{\quad}$

3. $55 + 64 = \underline{\quad}$

4. $88 + 92 = \underline{\quad}$




Column Addition

5. $345 + 178 = \underline{\quad}$

6. $256 + 375 = \underline{\quad}$

7. $103 + 439 = \underline{\quad}$

8. $722 + 139 = \underline{\quad}$



Word Problems


9. Sarah has 25 apples. She buys 18 more. How many apples does she have in total?

10. Ella spent £405 on a new bike and £ 116 on a new scooter. How much did she spend altogether?

Subtraction Practice:


Subtraction:

1. $56 - 23 = \underline{\quad}$
2. $68 - 45 = \underline{\quad}$
3. $98 - 73 = \underline{\quad}$
4. $105 - 60 = \underline{\quad}$



Column Subtraction

5. $472 - 198 = \underline{\quad}$
6. $208 - 134 = \underline{\quad}$
7. $683 - 410 = \underline{\quad}$
8. $528 - 394 = \underline{\quad}$



Word Problems

9. There are 64 children in the playground. If 23 leave, how many children are still there?
10. Mum had £538 in her bank. She spent £329. How much money does she have in her bank now

Multiplication Practice:

1. $7 \times 8 =$ ____

2. $4 \times 9 =$ ____

3. $3 \times 6 =$ ____

4. $4 \times 4 =$ ____

5. $50 \times 3 =$ ____


6. $34 \times 5 =$ ____

7. $88 \times 2 =$ ____

8. $67 \times 4 =$ ____

9. $300 \times 6 =$ ____

10. $95 \times 5 =$ ____



Division Practice:

Division

1. $56 \div 7 =$ ____

2. $81 \div 9 =$ ____

3. $27 \div 3 =$ ____


5. $30 \div 3 =$ ____

Formal Method (bus stop)

1. $324 \div 6 =$ ____

2. $210 \div 7 =$ ____

3. $155 \div 5 =$ ____



Worded Problems

1. There are 48 cookies. If each child gets 6, how many children can be served?
2. Miss Steele made 92 Harry Potter cupcakes. She packed them in boxes of 10. How many boxes did she need and how many were left over?

